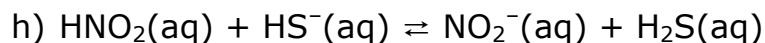
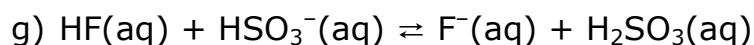

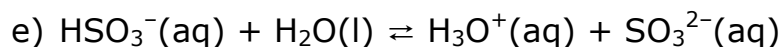

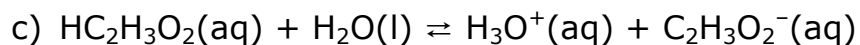

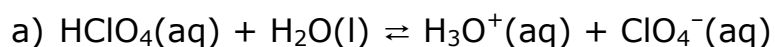


Conjugate Pairs Practice Questions

1. Identify the acid, base, conjugate acid and conjugate base for each of the following.



2. Complete the equation for the reaction of each of the following with water. Indicate whether the ion or molecule is an acid or base, and whether each reaction is explained by Arrhenius, Bronsted-Lowry, or both.

